


Name _____


Dear Parents,

Our test for telling time is _____! Please use this homework to review the skills with your child. Our test will cover these skills:

- telling time to the nearest 5 minutes
- determining the difference in events that would occur in AM and PM
- review concepts

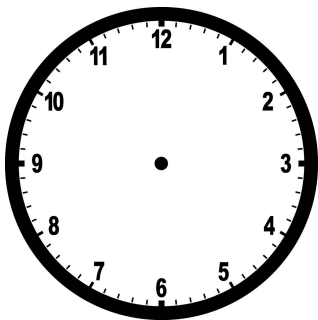
Part 1: Underneath each analog clock, write the time shown.



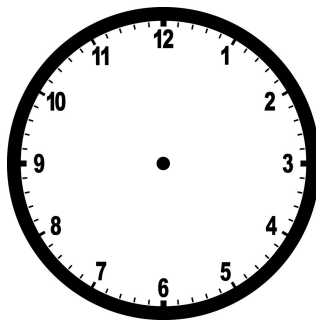




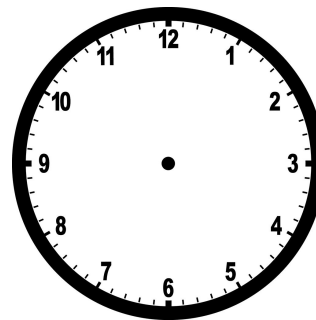
Part 2: Draw the hands on the clock to match the digital time given.



6:00



10:30



2:25

Name _____

Part 3: I can tell the difference between AM/PM.

1. How many hours are there in a day? _____
2. _____ minutes is equal to 1 hour
3. Timmy was in his classroom doing morning work. What time could it be?
 - a. 4:30 pm
 - b. 2:30 am
 - c. 8:30 am
4. Sarah was eating dinner at home with her family. What time could it be?
 - a. 5:00 am
 - b. 6:00 pm
 - c. 9:30 am
5. Alex was about to leave for soccer practice on Tuesday. What time could it be?
 - a. 5:00 am
 - b. 5:00 pm
 - c. 9:00 pm

